

***Note:** These questions are only indicative to demonstrate the test pattern.

Sample Questions for Class-XII

Accountancy

- The receipt and payment account is a summary of:
(A) debit and credit balance of ledger accounts
(B) cash receipts and payments
(C) expenses and income
(D) assets and liabilities
- The average profit of a business over the last 5 years amounting to ₹ 60,000. The normal commercial yield on capital invested in such a business is Deemed to be 10% per annum. The net capital invested in the business is ₹ 5,00,000. amount of goodwill, if it is based on 3 years purchase of last 5 years super profit will be
(A) ₹100000
(B) ₹180000
(C) ₹ 30000
(D) ₹ 150000
- At what rate is interest payable on the amount remaining unpaid to the executor of deceased partner, in absence of any agreement among partners, when he opts for interest and not share of profit:
(A) 12% per annum
(B) 8% per annum
(C) 6% per annum
(D) 7.5% per annum
- How much amount will be paid to creditor for ₹ 25,000 if ₹ 5,000 of the creditors are not to be paid and the remaining creditors agree to accept 5% less amount?
(A) ₹ 18,750
(B) ₹ 19,000
(C) ₹19,750
(D) ₹ 20,000
- 'A' limited purchase the assets from 'B' Limited for ₹5,40,000. A Limited issued 10% debentures of ₹100 each at 10% discount against the payment. The number of debentures received by B Limited will be:
(A) 54000
(B) 5400
(C) 60000
(D) none of the above
- A company issued debentures with a maturity period of not more than----- need not create debenture redemption reserve.
(A) 2 months
(B) 6 months
(C) 12 months
(D) 18 months

7. Revenue from operation ₹8,00,000 gross profit ratio 32%; indirect expenses 10% of gross profit and income tax 40%. What will be the amount of profit after tax?
 (A) ₹1,38,240
 (B) ₹1,02,400
 (C) ₹92,160
 (D) ₹1,53,600
8. In the absence of Express agreement, of interest @ 6% per annum is provided:
 (A) an opening balance of partner's capital accounts
 (B) on closing balance of partner's capital accounts
 (C) on loan given by partners to the firm
 (D) on opening balance of partners current accounts
9. If the new partner bring his share of goodwill in cash, it will be shared by old partners in:
 (A) ratio of sacrifice
 (B) old profit sharing ratio
 (C) new profit sharing ratio
 (D) in capital ratio
10. A, B and C are partner sharing profit or loss in the ratio of 2 : 3 : 4. A retires and after A's retirement B and C agree to share profit or loss in the ratio of 3 : 4 in future. Their gaining ratio will be:
 (A) 2 : 3
 (B) 4 : 3
 (C) 3 : 4
 (D) 1 : 1

Aptitude

Directions (Q. 1 to 2): In each of the following questions a number/letter series is given. Which one of the alternatives will replace the question mark (?)

1. 11, 29, 55, ?, 131
 (A) 110 (B) 81
 (C) 89 (D) 78
2. A1, C3, F6, J10, O15, ?
 (A) U21 (B) V21
 (C) T20 (D) U20

Directions (Q. 3 to 4): In each of the following letter series, some of the letters are missing, which are given in that order as one of the alternatives below it. Choose the correct alternative.

3. mc _ m _ a _ ca _ ca _ c _ mc
 (A) acmma (B) camcam
 (C) aaacmm (D) acmmca
4. In a certain code, 'TERMINAL' is written as 'NSFUMBOJ' and 'TOWERS' is written as 'XPUTSF'. How is 'MATE' written in that same code?
 (A) FUBN (B) UFNB
 (C) BNFU (D) BNDS

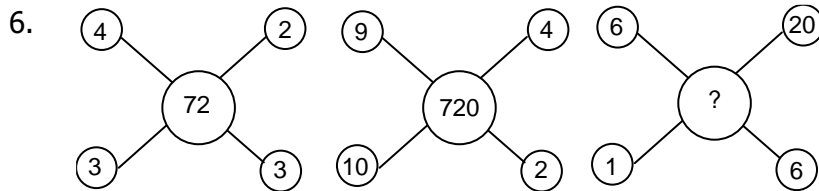
Directions (Q. 5 to 6): Find the missing character in the following figures.

5.

4	20	25
27	81	9
11	44	?

- (A) 4
(C) 55

- (B) 30
(D) 16



- (A) 72
(C) 7200

- (B) 720
(D) 38

Directions (Q. 7 to 8): Read the following information carefully and answer the questions which follow.

- i. 'P × Q' means 'P is the brother of Q'.
- ii. 'P - Q' means 'P is the mother of Q'.
- iii. 'P + Q' means 'P is the father of Q'.
- iv. 'P ÷ Q' means 'P is the sister of Q'.

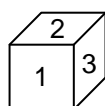
7. Which of the following means; M is niece of N?

- (A) $M \times R - N$ (B) $N \div J + M \div D$
(C) $N \div J + M$ (D) $N \times J - M$

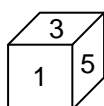
8. Starting from a point, Raju walked 12 m North, he turned right and walked 10 m, he again turned right and walked 12 m, then he turned left and walked 5 m. how far is he now and in which direction from the starting point?

- (A) 27 m towards east (B) 5 m towards east
(C) 15 m towards east (D) none of these

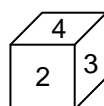
9. Which number is opposite to face 3?



(i)



(ii)



(iii)

- (A) 1
(C) 5

- (B) 6
(D) 4

10. In the given sequence. If every alternate letter starting from O is replaced with odd numbers starting from 1, which letter or number will be third to the left of tenth letter from your right?

N O P Q Y B Z A R S H I J K L M T U V G F E W X D C

- (A) 15
(B) L
(C) K
(D) 11

Business Studies

1. Which test is helpful in assessing the individual's capacity for learning new skills?
 - a. Aptitude test
 - b. Interest test
 - c. Personality test
 - d. Trade test

2. Who can file a complaint under the consumer protection act,1986?
 - a. Any consumer can file a complaint on his/her own and does not need the services of advocate/professionals
 - b. Any registered consumer association
 - c. The central government or any state government
 - d. All of the above

3. Liberalisation means
 - a. Integration among economies
 - b. Policy of planned disinvestment
 - c. Reduced Government restrictions
 - d. None

4. *To make the sports day of the school successful the Headmaster of the school divided all activities into task groups each dealing with a specific area like holding of the events ,arrangement of medals, refreshments, etc .Each group was placed under the overall supervision of a senior teacher. The physical education teacher was made responsible for holding different events, the home science teacher for refreshments and the maths teacher for medals.
Which function of the management is performed by Headmaster in doing so?
 - a. Organizing
 - b. Staffing
 - c. Directing
 - d. Controlling

5. The process of converting the message into communication system is known as
 - a. Decoding
 - b. Encoding
 - c. Media
 - d. Noise

6. Daljeet Ltd. has decided to become the market leader in selling water bottles. The company decides to take care of all the departments. The top management decides to set criterion for all the business activities right from the purchase of raw material to manufacturing and packaging of water bottles. Which technique of scientific management is used by the company?
 - a. Time study
 - b. Differential piece wage system
 - c. Method study
 - d. Standardization

7. What is meant DEMAT account
 - a. Development of market account
 - b. Demand depository account
 - c. Depository participant account
 - d. Dematerialization of securities

8. The reserve bank of India changes the cash reserve ratio from time to time, which in turn affects the amount of funds available to be given as loans by commercial banks. Which market and the concerned security is being referred to in the above statement?
 - a. Secondary market, debt
 - b. Money market, call money
 - c. Primary market, debt
 - d. Capital market, equity

9. Facebook, Twitter and WhatsApp are the result of
 - a. social environment
 - b. technological environment
 - c. political environment
 - d. both (a) & (b)

10. The authority-responsibility relationship that binds individual as superiors and subordinates in an organisation give rise to what?
 - a. uses of management
 - b. functions of management
 - c. meaning of management
 - d. levels of management

Economics

Q.1 National income is:

- | | |
|--------------------|-----------------------|
| (a) Stock | (b) Flow |
| (C) Static concept | (d) None of the above |

Q.2 Balance of payment deficit can be removed through:

- | | |
|-----------------------------|-----------------------|
| (a) Devaluation of currency | (b) Export promotion |
| (C) Import substitution | (d) All of the above. |

Q.3 An initial deposit of Rs 5,000 results in a multiple expansion of credit to Rs 100000, what is the value of money multiplier:

- (a).2 (b). 8 (C). 10 (d). 20

Q4. which of the following measures of meeting deficit in budget, leads to an increase in money supply in the economy:

(a). Disinvestment (b). Loan from world Bank (C).Deficit financing (d).All of these.

Q5. The consumption curve is a straight line because:

- (a). APC is falling while MPC is rising (b). APC is falling and MPC is also falling
(C). APC is falling but MPC is constant (d). APC is constant and MPC is rising

Q.6 Why gift tax is considered as an paper tax?

- (a). It is an indirect tax (b). It yields very low revenue
(C).It is a direct tax. (d). Both (a) and (b)

Q7. Equilibrium level of income can be determined at:

- (a). Full employment (b). Under full employment
(C). Over full employment (d). Any of the above

Q8. If entire additional income is saved then MPC is:

- (a). Zero (b). one
(C). Infinity (d). Between 0 and 1

Q.9. Find the correct statement:

- (a). AD curve has a positive slope
(b). AD curve originates from point of origin and has a positive slope.
(C). According to Keynes, investment increases with increase in income.
(d). Consumption is zero at zero level of income..

Q10. who was the first person to define poverty in term of jail cost of living?

- (a). DadabaiNaraji (b). V. K. R. V Rao (C). William Digby (d). R. C. Desai